






## Question 1

On his worksheet, Li got one question wrong and 4 questions correct. *How many questions were on Li's worksheet?*

1	2	3	4	5
✗	✓	✓	✓	✓






## Question 2

There were 2 plates in the sink that needed to be washed and some cups.  
Altogether 5 things needed to be washed. *How many cups needed washing?*

1	2	3	4	5
				






## Question 3

Jane has pet cats. There were 3 children at Jane's house. Each child picked up one cat.  
This left 2 cats without anyone to cuddle them. *How many cats were there at Jane's house?*

1	2	3	4	5
				

## Question 4

At the fast food drive-through there were 2 drinks and some burgers on the menu page.  
There were 5 items listed on the menu. *How many burgers were listed?*

1	2	3	4	5
				

**Question 5**

There were some blue donuts and 5 pink donuts. There were 2 more pink donuts than blue.

*How many blue donuts were there?*

**Pink  
Donuts**



**Blue  
Donuts**



2 more pink  
donuts

**Question 6**


The sport teacher was matching one ball to every bat when tidying up. Four bats had a matching ball.

There was one bat fewer than balls. *How many balls were there?*

**Cricket  
Balls**



**Cricket  
Bats**

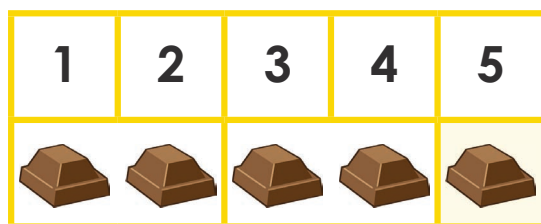


one  
bat  
fewer


**Question 7**

Chocolate bites come in bags of 5. Josh had one bag in the fridge.

*After eating two each day, for two days how many were left in the fridge?*

**Question 8**

Aisha had 5 toy ponies. Some were brown. The other 3 were white. *How many brown ponies did Aisha have?*




### Question 9

Kate was putting away her textas. Three had no lids so were dried out. Kate had two more textas with lids than without. *How many textas did Kate have still with lids?*

Lidded  
Textas



No Lid  
Textas



2 more  
with lids


### Question 10

In the fruit bowl there were some red apples and 2 green. There was three more red than green. *How many red apples were there?*

Red  
Apples



Green  
Apples



3 more red apples


### Question 11

There were some ducks swimming on the lake. There were 5 ducks sleeping on the grass. There were 3 more ducks sleeping than swimming. *How many ducks were swimming on the lake?*

Sleeping  
Ducks



Swimming  
Ducks



3 more  
sleeping ducks

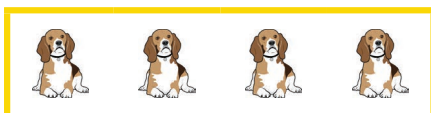
### Question 12

There were some bones and 4 dogs. Each dog picked up one bone to eat. There was one dog fewer than there were bones. *How many bones were there?*

Bones



Dogs



one  
dog  
fewer